



Centre Number	Candidate Number

MINISTRY OF EDUCATION AND HUMAN RESOURCES DEVELOPMENT

SOLOMON ISLANDS FORM THREE EXAMINATION

2015

MATHEMATICS

WEDNESDAY 4th NOVEMBER 9.00AM

TIME: 2 HOURS plus
10 MINUTES

<u>SECTION</u>	<u>CONTENT</u>	<u>MARKS</u>
A	Multiple Choice Questions	20
B	Short Answer Questions	40
C	Long Answer Questions	40
		<hr/>
	TOTAL	100

INSTRUCTIONS TO CANDIDATES

1. Do not open this Booklet until you are told to do so.
2. Write both your Centre Number and Candidate Number in the box provided at the top right hand corner of this page.
3. Before you answer the questions, read through the instructions carefully.
4. Write all your answers in the spaces provided in this Booklet.
4. Calculators should not be used.
5. Three figure tables are provided.
6. Show all your workings for Sections B and C. You may lose some marks if you do not show your working.

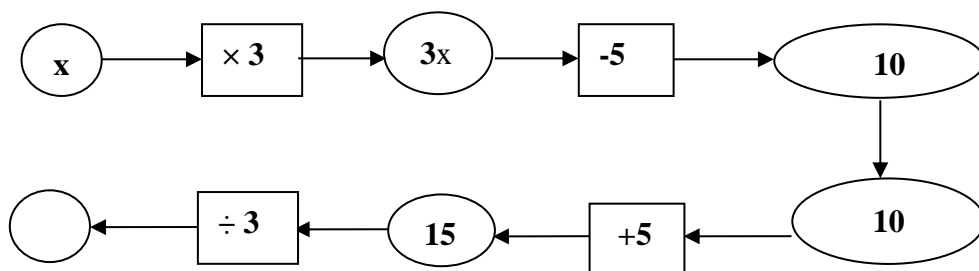
THIS BOOKLET CONTAINS 27 NUMBERED PAGES.

SECTION A: MULTIPLE CHOICE**(20 MARKS)****WRITE THE LETTER OF THE MOST CORRECT ANSWER IN THE BOX PROVIDED IN THE BACK FLAP.**

1. Think of a number, add 2 then multiply by 3 equals 4. The algebraic equation is:

- A. $x + 2 \times 3 = 4$
- B. $(x + 2) 3 = 4$
- C. $x + 6 = 4$
- D. $2(x + 3) = 4$

2. From the number machine below the value of x is;

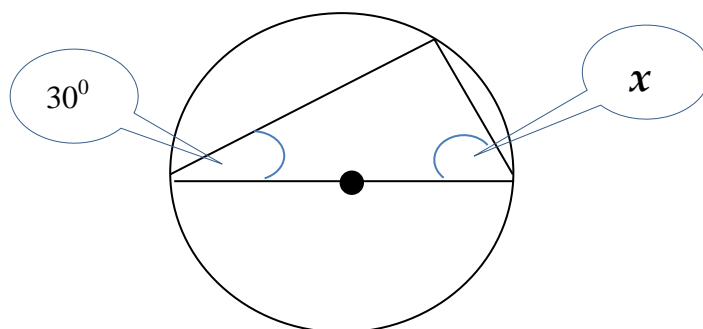


- A. 3
 - B. 10
 - C. 5
 - D. 15
3. $4x + 9 = 41$, x is equal to:

- A. 8
- B. 32
- C. 4
- D. 50

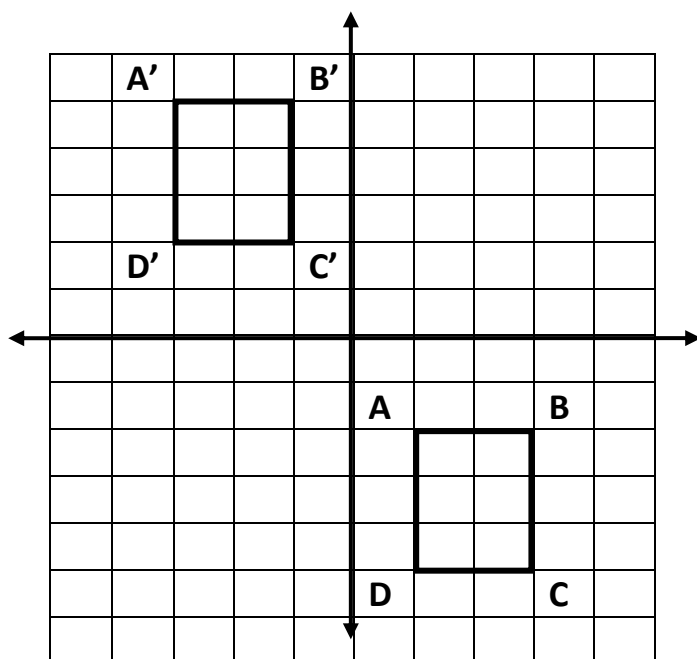
4. The angle marked x is equal to;

- A. 60°
- B. 45°
- C. 90°
- D. 30°

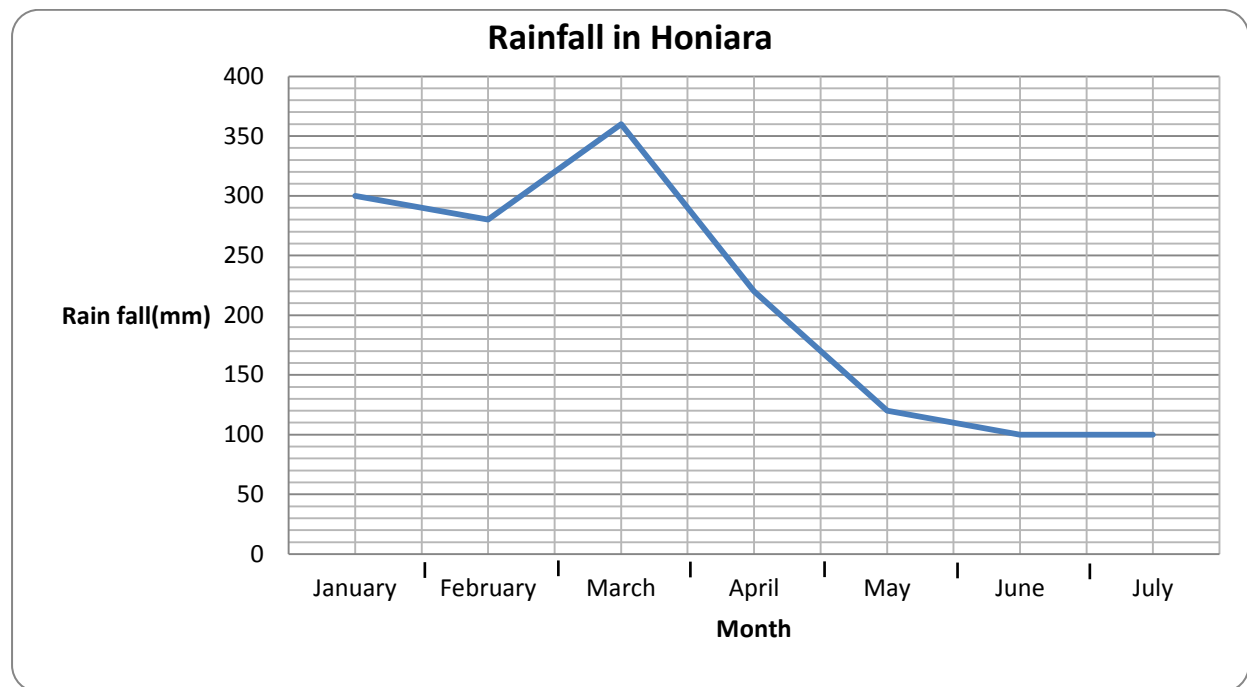


5. The translation of rectangle ABCD to rectangle A'B'C'D' is best described by which of the following;

- A. $\begin{pmatrix} 4 \\ 7 \end{pmatrix}$
- B. $\begin{pmatrix} -4 \\ 7 \end{pmatrix}$
- C. $\begin{pmatrix} -7 \\ 4 \end{pmatrix}$
- D. $\begin{pmatrix} -4 \\ -7 \end{pmatrix}$



Study the graph below to answer questions 4 and 5. The graph shows the total rainfall for each month from January to July in Honiara in the year 2013.



6. What is the average rainfall (mm) between the months of January and April?

- A. 1160mm
- B. 290mm
- C. 1070mm
- D. 267.5mm

7. The total rainfall from April to July is:

- A. 220 mm
- B. 320 mm
- C. 440mm
- D. 540mm

8. $3y = 2x - 6$ in the form of $y = mx + c$ is:

A. $y = \frac{2}{3}x - 2$

B. $y = \frac{2}{3}x - 6$

C. $y = \frac{2}{3}x - 3$

D. $y = -\frac{2}{3}x - 2$

9. The gradient of the equation $y - \frac{x}{2} + 5 = 0$ is;

A. $\frac{1}{2}x$

B. -5

C. $\frac{1}{2}$

D. x

10. After selling their fish, Paul and Tom decided to share their profit of \$1,250.00 in the ratio 3:7. Paul will receive;

A. \$125.00

B. \$250.00

C. \$375.00

D. \$875.00

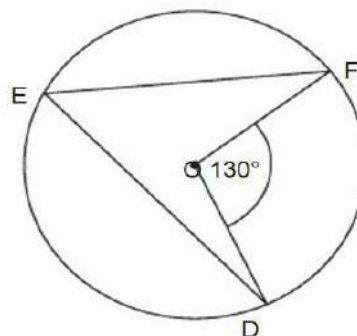
11. Find the size of angle $\mathbf{D\hat{E}F}$

A. 50°

B. 55°

C. 60°

D. 65°



12. $52,139,800 \text{ m}^2$ is equal to;
- $5.21398 \times 10^8 \text{ cm}^2$
 - $52.1398 \times 10^9 \text{ cm}^2$
 - $52.1398 \times 10^{10} \text{ cm}^2$
 - $5.21398 \times 10^{11} \text{ cm}^2$
13. It takes a dolphin 45 minutes to travel a distance of 54,000 metres. What is its speed in kilometres per hour?
- 72 km/hr
 - 18km/hr
 - 1200km/hr
 - 120km/hr
14. Lionel puts a 20% mark up and sells a pair of soccer shoe at \$420.00. What is the **cost price**?
- \$300.00
 - \$400.00
 - \$350.00
 - \$375.00
15. 0.000000178 in standard form is;
- 1.78×10^{-8}
 - 1.78×10^{-7}
 - 1.78×10^7
 - 1.78×10^8

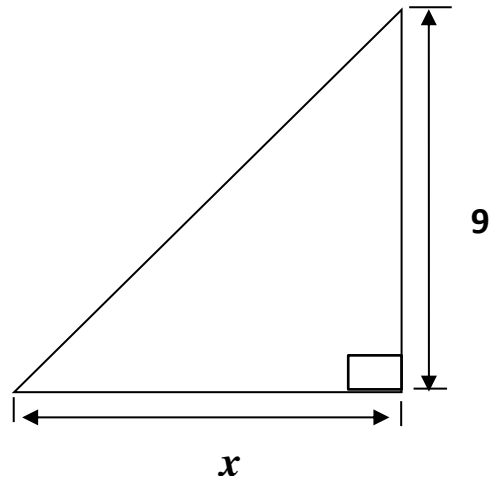
Use the data below to answer questions 16

A Form 5 student measured the heights of Grade 4 pupils in class for his Mathematics project. He recorded his findings in a table as shown below;

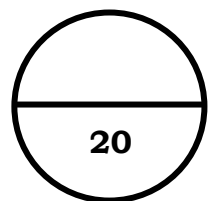
unit	Heights of Grade 4 pupils												
cm	120	125	145	134	152	125	135	152	145	120	134	134	136

16. What is the mode?
- A. 152 cm
 - B. 145 cm
 - C. 120 cm
 - D. 134 cm
17. Which set of numbers below has a median and mean of 6?
- A. 1,2,3,6,7,8,9
 - B. 2,5,5,6, 7,8,9
 - C. 2, 2,3,6,7,7,8
 - D. 3,5,5,6,7,8,9
18. Find the missing number if the average of the following numbers is 11.
13, 9, 8, 10, 12, _____, 12, 11
- A. 13
 - B. 12
 - C. 10
 - D. 11
19. A map has a scale of 1: 50,000. If the measurement on the map is 3.5cm, what is the **true distance** in kilometres?
- A. 1750 km
 - B. 175km
 - C. 17.5km
 - D. 1.75 km

20. Which of the following ***equations*** would you use to calculate the value of x ?
- A. $x = 9 \tan 67^\circ$
 - B. $x = 9 \cos 23^\circ$
 - C. $x = 9 \sin 67^\circ$
 - D. $x = 9 \tan 23^\circ$



Total mark for MC Q1-Q20:



SECTION B: SHORT ANSWERS QUESTIONS**(40 MARKS)****SHOW YOUR WORKING AND WRITE THE ANSWER ON THE SPACES PROVIDED. ALL QUESTIONS ARE WORTH 2 MARKS EACH.**

21. Expand and simplify $9n - 3(2n - 1) - 5$

(2 marks)

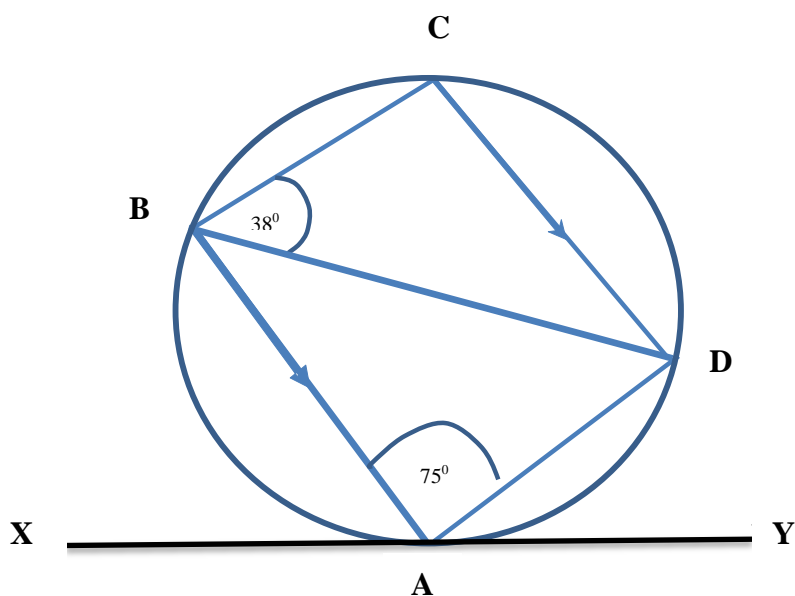
22. Solve $\frac{4}{5}x - \frac{2}{5}x = 14$ $x =$

(2 marks)

23. Solve $-4(3 - t) = 6(t + 5)$ $t =$

(2 marks)

Use the diagram of a circle below to answer Question 24

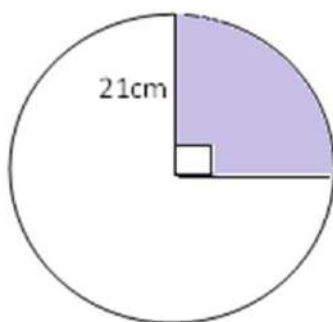


24. Calculate the size of angle \hat{BCD} in the above diagram

Angle \hat{BCD} = _____
(2 marks)

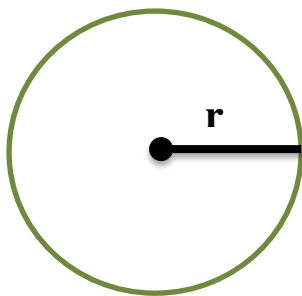
25. Calculate the **shaded area** of the circle below;

Use $(\pi = \frac{22}{7})$



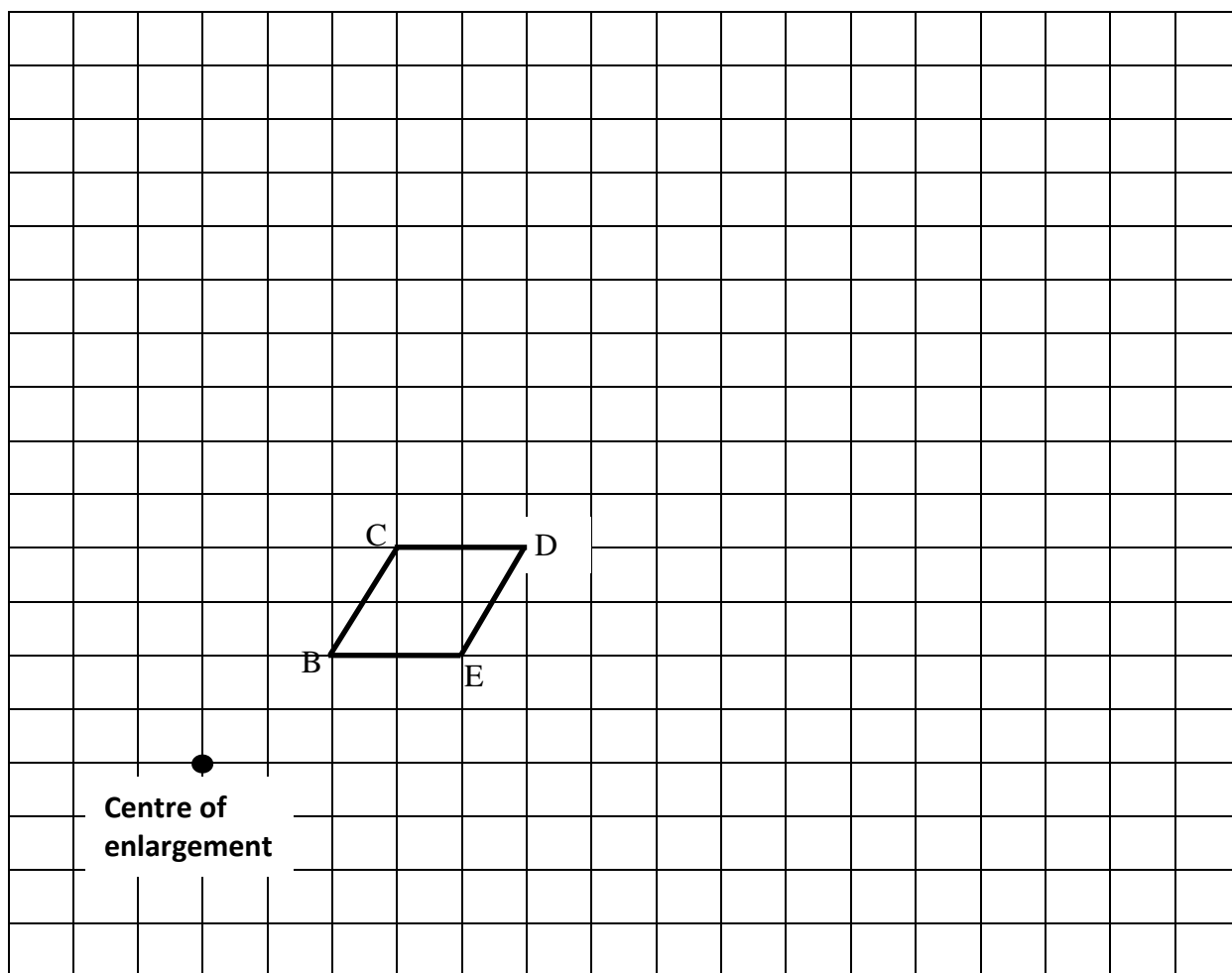
Area of sector: _____ cm^2
(2 marks)

26. The area of a circle is 154 cm^2 , calculate the **radius, r** using $\pi = \frac{22}{7}$



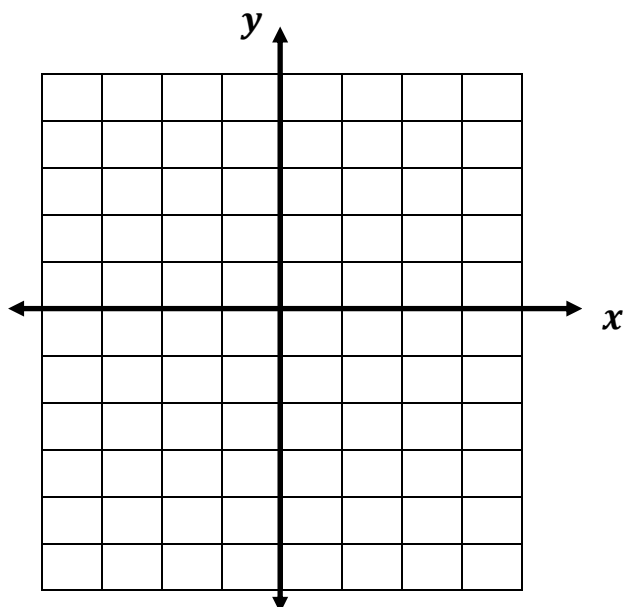
Radius = _____ cm
(2 marks)

27. Enlarge the shape below using a scale factor of 2.



(2 marks)

28. **Sketch** the graph of $y = 3x + 2$



(2 marks)

-
29. Simplify $\frac{35x^3y^4}{6x^2} \div \frac{7y^2x}{24x^4y}$

Answer = _____
(2 marks)

30. A container that is $\frac{2}{5}$ full contains 4000ml. Calculate the *capacity* of the full container?

Capacity of the full container: _____
(2 marks)

31. Patti buys a bicycle at \$1,000.00 and sells it at \$1,250.00. Find the **percentage mark up**.

Percentage mark up: _____
(2 marks)

32. The ratio of bread to buns in a Bakery shop is 5:3. If there are 160 breads, find the number of buns.

Number of buns: _____
(2 marks)

33. Calculate: $36^{\frac{1}{2}} + 8^{\frac{1}{3}}$

Answer: _____
(2 marks)

34. Simplify $\frac{(12p^2q^4)^3}{(2p^3q^6)^2}$

Answer: _____
(2 marks)

35. The time taken to boil water using firewood is ***directly proportional*** to the volume of the water. If it takes 15 minutes to boil 6 litres of water, how long will it take to boil 10 litres of water?


Answer: _____
(2 marks)

36. It took 30 minutes to walk from the village to the school. The average speed along the way was 10 km/hr. How many kilometres away is the village from school?

Distance (km): _____
(2 marks)

Study the frequency table carefully and answer questions 37 and 38.

37. Use information from frequency table to draw a bar graph



Frequency table

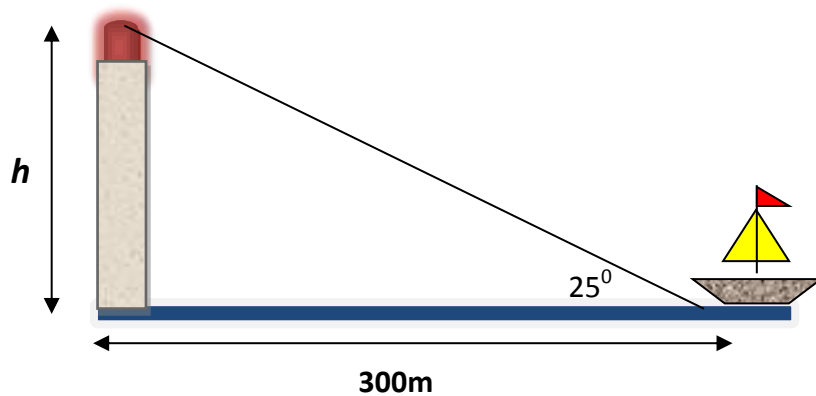
Score(x)	Frequency(f)
1	4
2	7
3	2
4	5
5	3
6	6

(3 marks)

38. What is the modal score?

Modal score = _____
(1 mark)

39. The angle of elevation to the top of a light house from a sailing boat that is 200m from the base is 37°

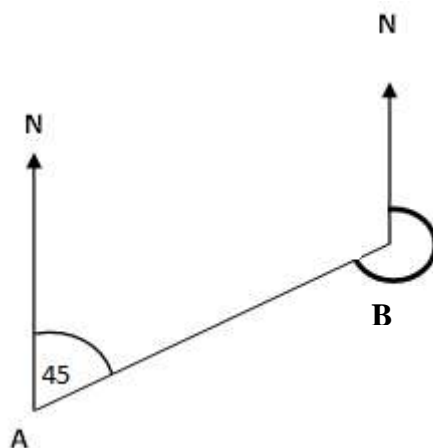


$\cos 25^\circ = 0.906$
$\sin 25^\circ = 0.423$
$\tan 25^\circ = 0.466$

Calculate the height of the light house.

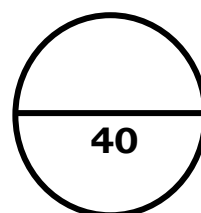
Height = _____ m
(2 marks)

40. What is the bearing of point A from Point B?



Answer: _____
(2 marks)

Total mark for Section B:



SECTION C: LONG ANSWER QUESTIONS

(40 MARKS)

THERE ARE 10 QUESTIONS. SHOW YOUR WORKING AND WRITE THE ANSWERS ON THE SPACES PROVIDED.

41. Martin is three times the age of his son, the sum of their age is 48 years.

a) How old is his son?

Answer: _____
(2 marks)

b) How old is Martin?

Answer: _____
(1 mark)

42. The price of a mobile phone is P dollars and discounted by ten dollars. Twenty students pay the discounted price and the total is \$3000.00.

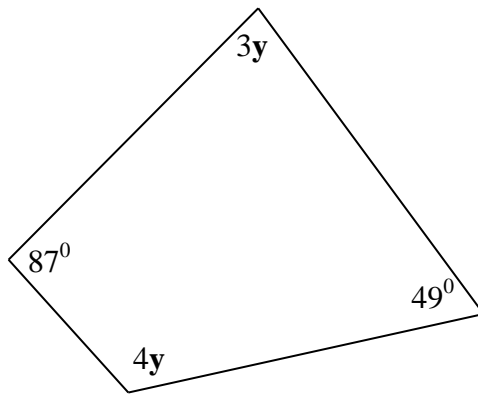
a) Write an equation involving p ?

Equation: _____
(2 marks)

b) Solve the equation

$P =$ _____
(2 marks)

43.



- a) Calculate the value of y

$$y = \underline{\hspace{2cm}} \quad (2 \text{ marks})$$

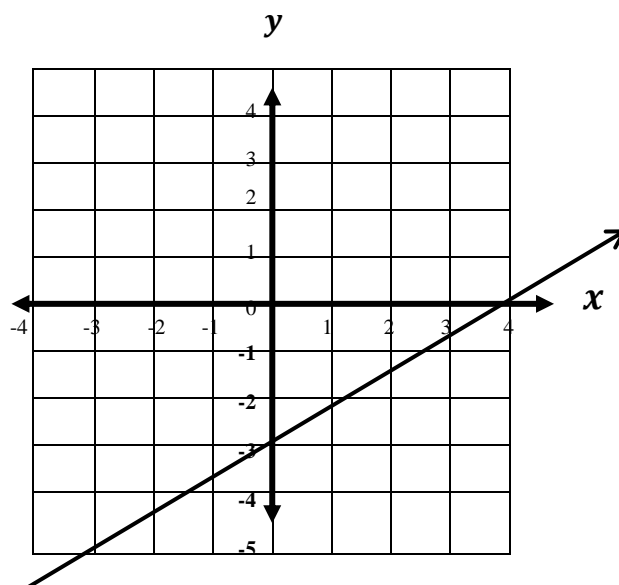
- b) What is the size of angle $3y$?

$$3y = \underline{\hspace{2cm}} \quad (1 \text{ mark})$$

- c) What is the size of angle $4y$?

$$4y = \underline{\hspace{2cm}} \quad (1 \text{ mark})$$

44. Find the equation of the line below

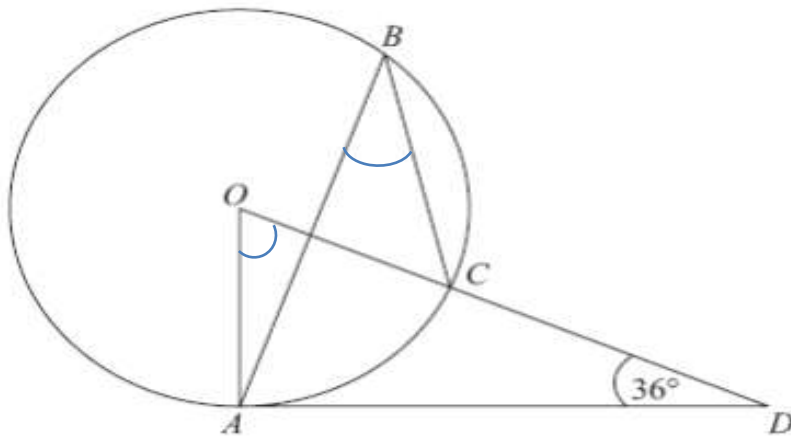


a) Find the gradient of the line

Gradient: _____
(2 marks)

b) Write down the equation line

Equation: _____
(2 marks)



45. The diagram above shows a circle centre O , A , B and C are points on the circumference. DCO is a straight line. DA is a tangent to the circle.
Angle $ADO = 36^\circ$

(a) Work out the size of angle AOD

Angle AOD : _____
(3 marks)

(b) Work out the size of angle ABC .

Angle ABC : _____
(1 mark)

46. Mr. John invested \$6,500.00 in a commercial bank at 4.5% interest per annum. He decided to withdraw his money after 5 years.

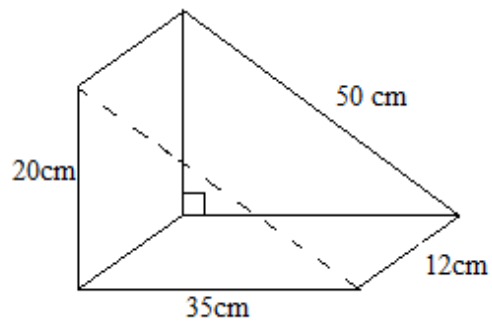
a) Calculate his simple interest after 5 years.

Simple Interest: \$ _____
(2 marks)

b) Calculate the total amount he will receive after 5 years.

Total Amount: \$ _____
(1 mark)

47.



- a) Calculate the total area of 2 triangle-shaped sides.

Total area of triangle-shaped sides: _____ cm^2
(2 marks)

- b) Calculate the total area of 3 rectangle-shaped sides

Total area of 3 rectangle-shaped sides: _____ cm^2
(3 marks)

- c) Calculate the total surface area

Total Surface Area = _____ cm^2
(1 mark)

47. The speed of light is usually 300,000 kilometres per second (km/sec).

- a) Calculate the distance it covers in 1 minute. Write your answer in standard form

Distance (m): _____
(2 marks)

- b) Calculate the distance it covers in 1 hour. Write your answer in standard form

Distance (in hr): _____
(2 marks)

48. The distances in kilometers travelled by 60 students to school are shown below:

7, 5, 10, 11, 12, 6, 2, 4, 9, 10, 11, 1, 3, 15, 3, 8, 8, 16, 4, 14, 15, 3, 5, 9, 12, 16, 4, 14, 15, 3, 5, 9, 12, 7, 5, 10, 11, 12, 6, 2, 4, 9, 13, 15, 3, 8, 8, 16, 9, 6, 2, 4, 9, 10, 11, 1, 3, 15, 3

- a) Complete the frequency tally table for the data above (3 marks)

Scores (x)	Tally	Frequency(f)	fx
1			
2			
3			
4			
5			
6			
7			
8			
9			
10			
11			
12			
13			
14			
15			
16			
Total			

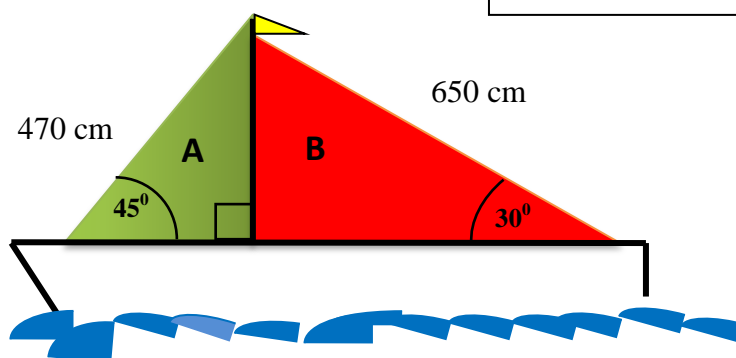
- b) What is average distance travelled by the students to school?

Average distance: _____
(1 mark)

49. Jack has two sails on his yacht, **A** and **B** as shown below.

Additional information

$\text{Sine } 30^\circ = 0.5$	$\text{Sine } 45^\circ = 0.7$
$\text{Cos } 30^\circ = 0.9$	$\text{Cos } 45^\circ = 0.7$
$\text{Tan } 30^\circ = 0.6$	$\text{Tan } 45^\circ = 1$



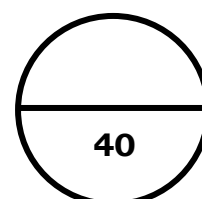
- a) Using additional information above, calculate the height of the green sail (A).

Height: _____ cm
(2 marks)

- b) Using additional information above, calculate the bottom length of the red sail (B).

Bottom length: _____ cm
(2 marks)

Total mark for Section C:



CANDIDATE NUMBER	CENTRE NUMBER
<div><div></div><div></div><div></div><div></div><div></div></div>	<div><div></div><div></div><div></div></div>

ANSWER SHEET
MULTIPLE CHOICE

You are to write the letter of the
correct answer only

1	<div></div>	11	<div></div>
2	<div></div>	12	<div></div>
3	<div></div>	13	<div></div>
4	<div></div>	14	<div></div>
5	<div></div>	15	<div></div>
6	<div></div>	16	<div></div>
7	<div></div>	17	<div></div>
8	<div></div>	18	<div></div>
9	<div></div>	19	<div></div>
10	<div></div>	20	<div></div>

FOR MARKER USE ONLY

SECTION	MARKS	SCORE
A	20	
B	40	
C	40	
TOTAL	100	
Marker's Initial		