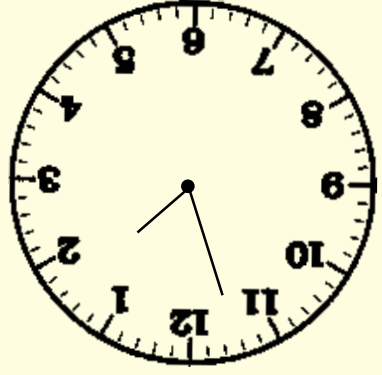


Answer
120 seconds

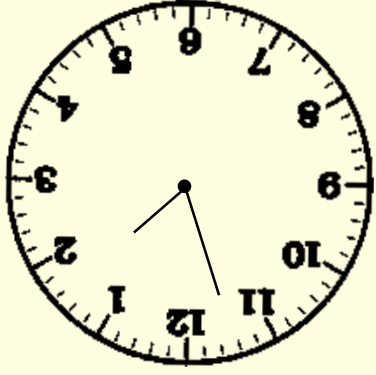
3



How many
seconds in
two minutes?

Answer
1 minute

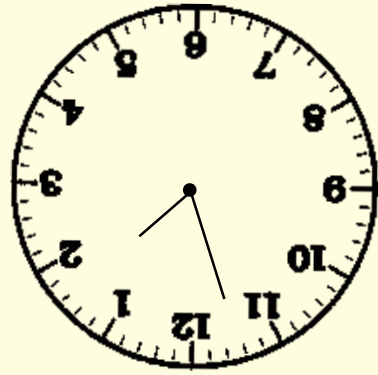
2



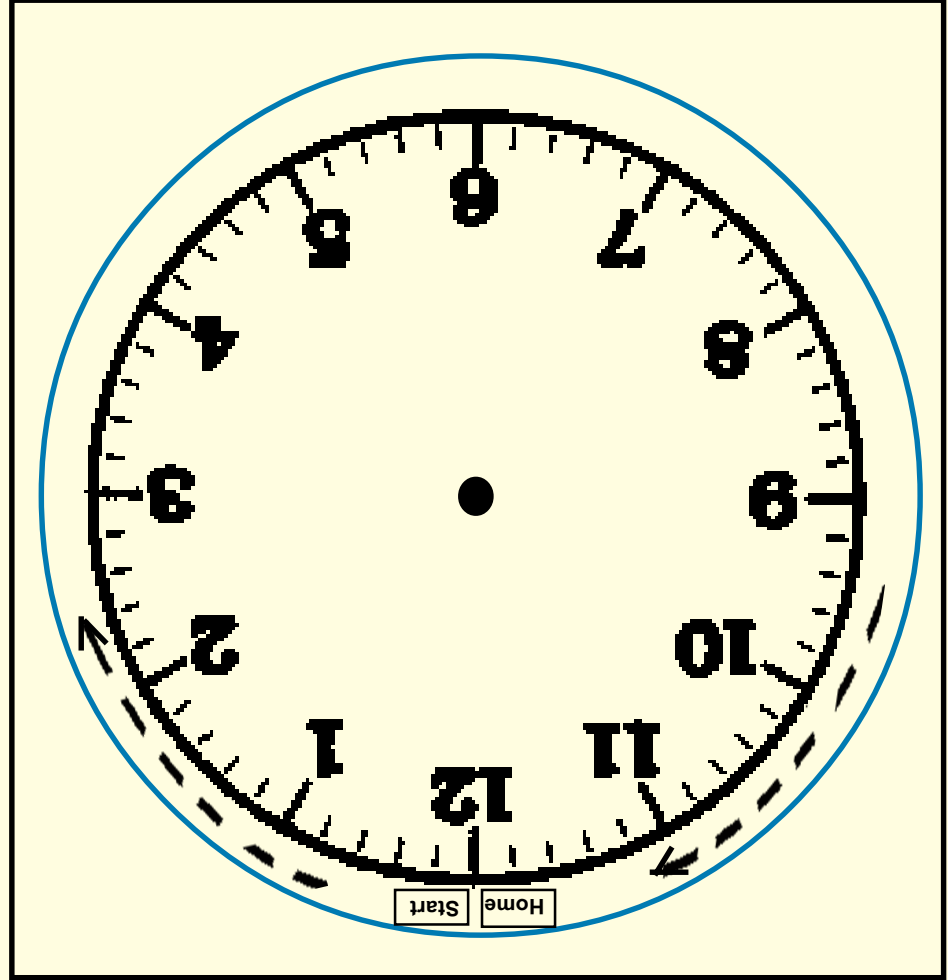
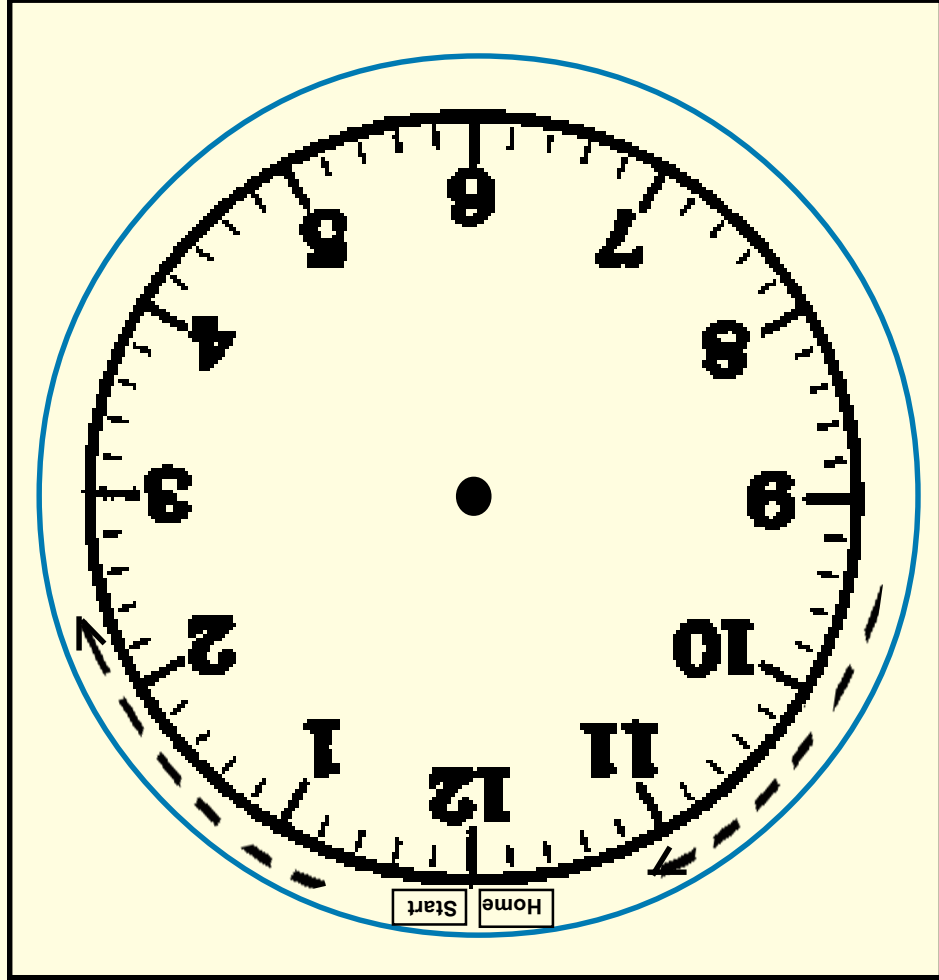
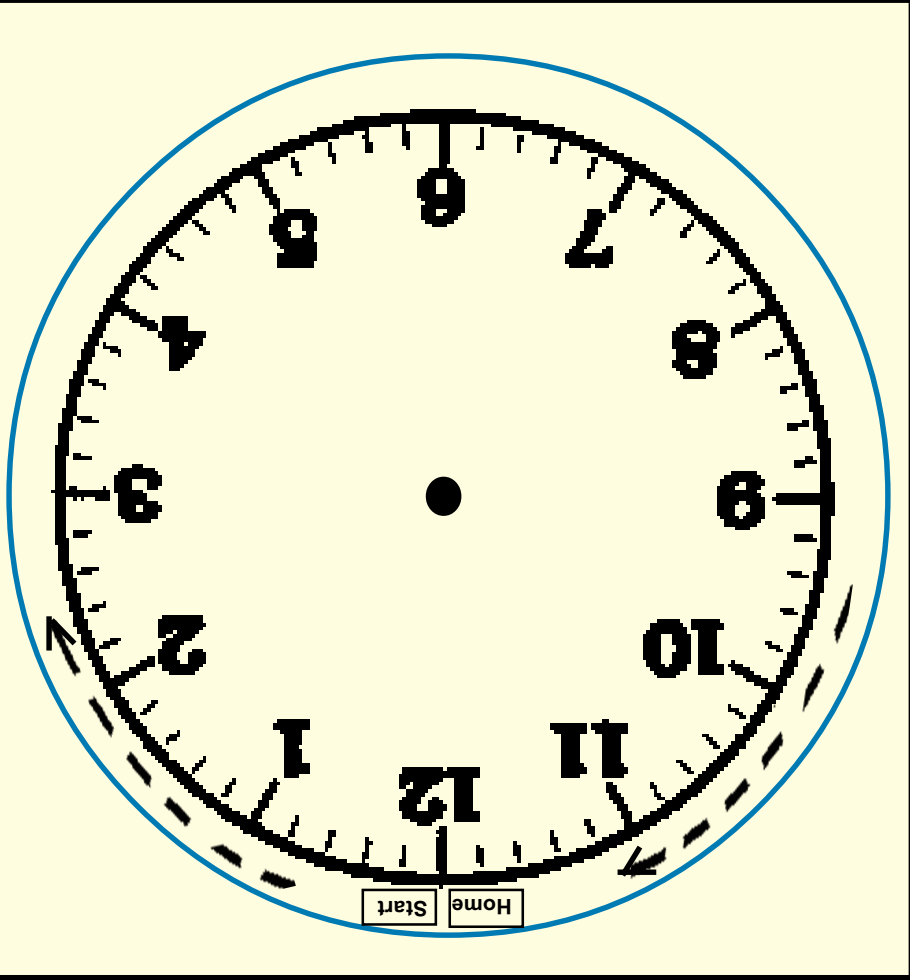
How many
minutes in
60 seconds?

Answer
60 seconds

1




How many
seconds in
one minute?



Unit 15: Time Topic 17 and 18

Answer
1 minute 5 seconds

9

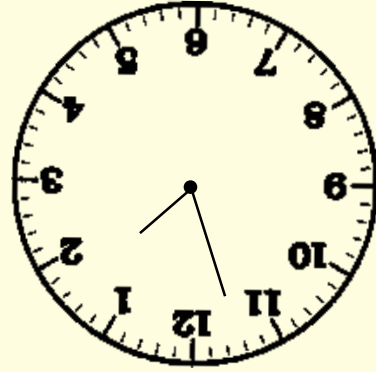


How many
minutes in
65 seconds?

Unit 15: Time Topic 17 and 18

Answer
1 minute 40 seconds

8




How many
minutes in
100 seconds?

Unit 15: Time Topic 17 and 18

Answer
1 minute 30 seconds

7

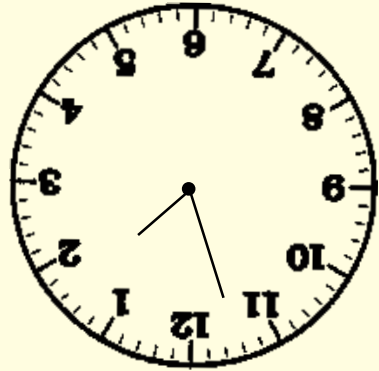


How many
minutes in
90 seconds?

Unit 15: Time Topic 17 and 18

Answer
1 minute 10 seconds

6

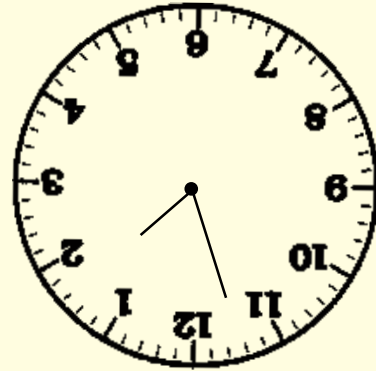


How many
minutes in
70 seconds?

Unit 15: Time Topic 17 and 18

Answer
180 seconds

5




How many
seconds in
3 minutes?

Unit 15: Time Topic 17 and 18

Answer
2 minutes

4

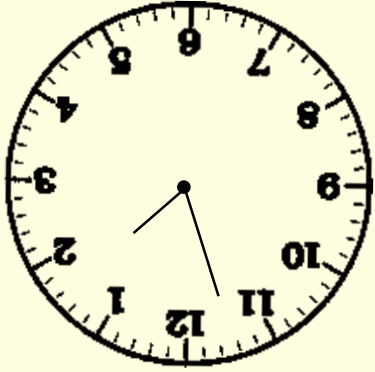


How many
minutes in
120 seconds?

Unit 15: Time Topic 17 and 18

Answer
300 minutes

15

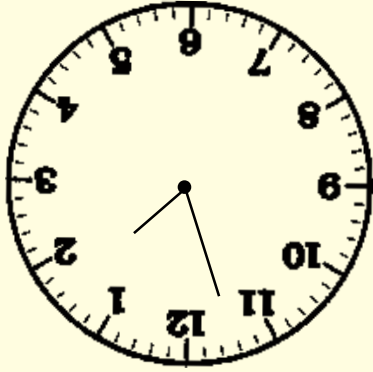


How many
minutes in
5 hours?

Unit 15: Time Topic 17 and 18

Answer
240 minutes

14

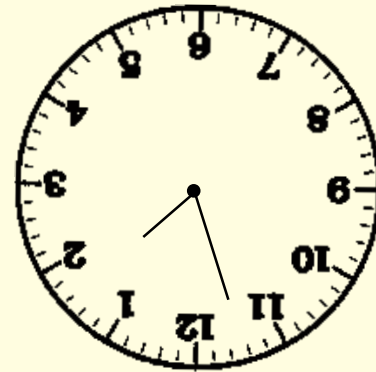


How many
minutes in
4 hours?

Unit 15: Time Topic 17 and 18

Answer
180 minutes

13

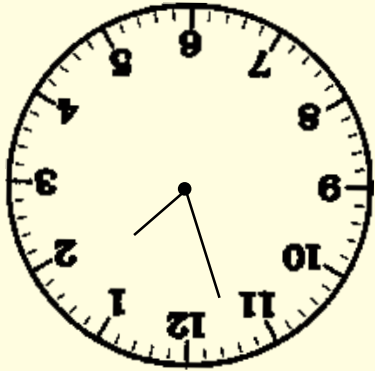


How many
minutes in
3 hours?

Unit 15: Time Topic 17 and 18

Answer
120 minutes

12



How many
minutes in
2 hours?

Unit 15: Time Topic 17 and 18

Answer
60 minutes

11

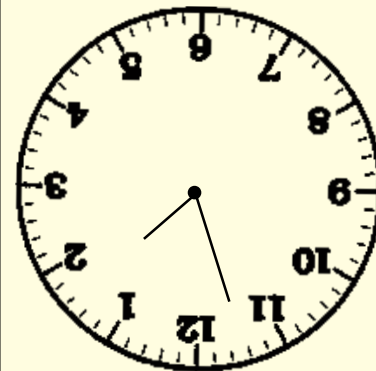


How many
minutes in
1 hour?

Unit 15: Time Topic 17 and 18

Answer
1 minute 20 seconds

10



How many
minutes in
80 seconds?

Unit 15: Time Topic 17 and 18

Answer
1 hour 40 minutes

21

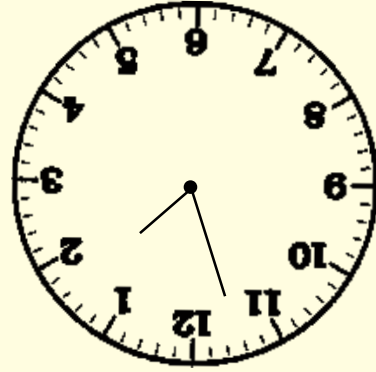


How many
hours in
100 minutes?

Unit 15: Time Topic 17 and 18

Answer
1 hour 10 minutes

20




How many
hours in
70 minutes?

Unit 15: Time Topic 17 and 18

Answer
1 hour 20 minutes

19



How many
hours in
80 minutes?

Unit 15: Time Topic 17 and 18

Answer
3 hours

18

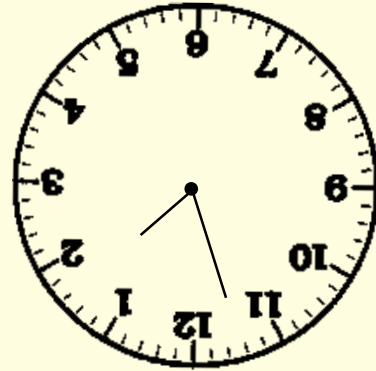


How many
hours in
180 minutes?

Unit 15: Time Topic 17 and 18

Answer
2 hours

17




How many
hours in
120 minutes?

Unit 15: Time Topic 17 and 18

Answer
1 hour

16




How many
hours in
60 minutes?

Unit 15: Time Topic 17 and 18

Answer
240 seconds

27

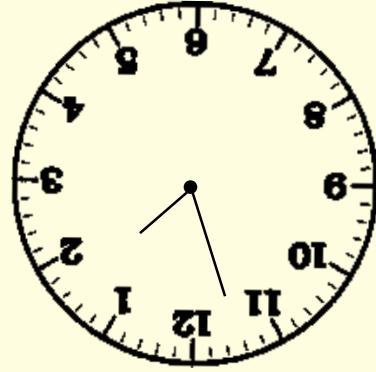


How many
seconds in
4 minutes?

Unit 15: Time Topic 17 and 18

Answer
135 minutes

26




How many
minutes in
2 hours
15 minutes?

Unit 15: Time Topic 17 and 18

Answer
200 minutes

25

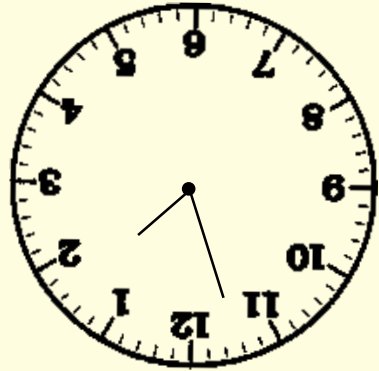


How many
minutes in
3 hours
20 minutes?

Unit 15: Time Topic 17 and 18

Answer
130 minutes

24

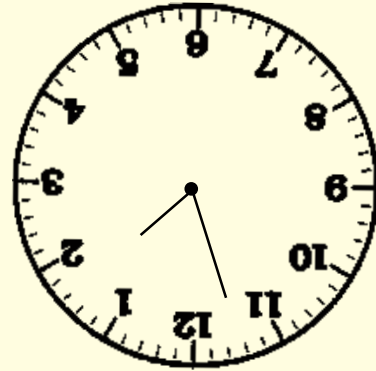


How many
minutes in
2 hours
10 minutes?

Unit 15: Time Topic 17 and 18

Answer
95 minutes

23




How many
minutes in
1 hour
35 minutes?

Unit 15: Time Topic 17 and 18

Answer
85 minutes

22

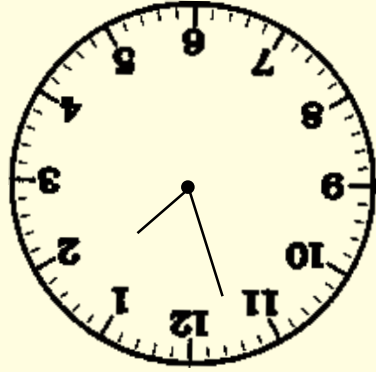


How many
minutes in
1 hour
25 minutes?

Unit 15: Time Topic 17 and 18

Answer
135 seconds

33

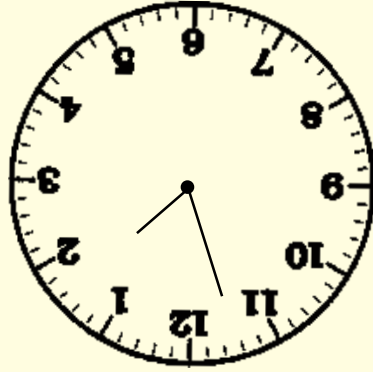


How many
seconds in
2 minutes
15 seconds?

Unit 15: Time Topic 17 and 18

Answer
125 seconds

32

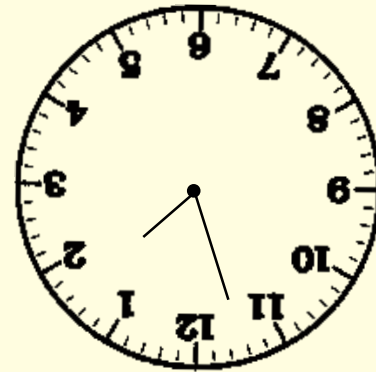


How many
seconds in
2 minutes
5 seconds?

Unit 15: Time Topic 17 and 18

Answer
90 seconds

31

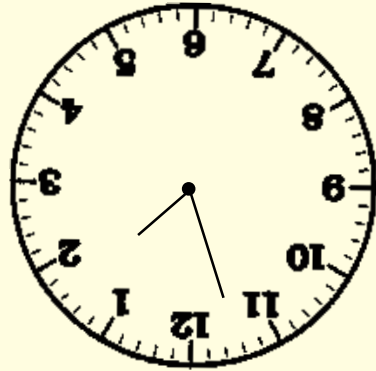


How many
seconds in
1 minute
30 seconds?

Unit 15: Time Topic 17 and 18

Answer
70 seconds

30

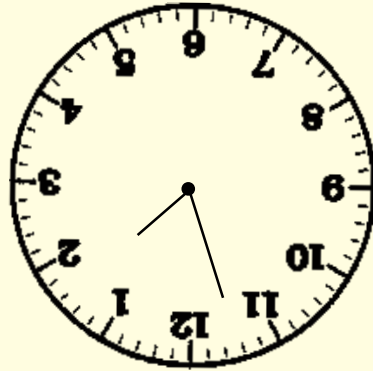


How many
seconds in
1 minute
10 seconds?

Unit 15: Time Topic 17 and 18

Answer
65 seconds

29

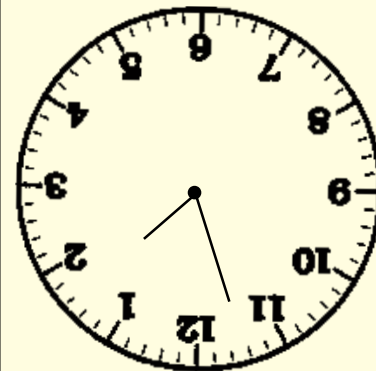


How many
seconds in
1 minute
5 seconds?

Unit 15: Time Topic 17 and 18

Answer
am

28




Is 7 o'clock
early morning
am or pm?

Unit 15: Time Topic 17 and 18

Answer
pm

39

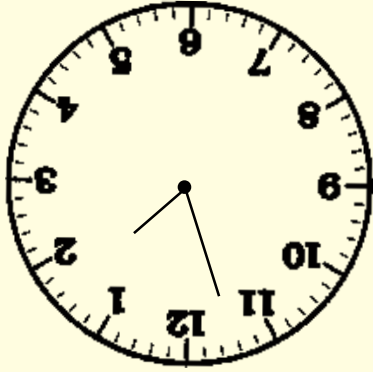


Is 12 o'clock
mid day am
or pm?

Unit 15: Time Topic 17 and 18

Answer
am

38

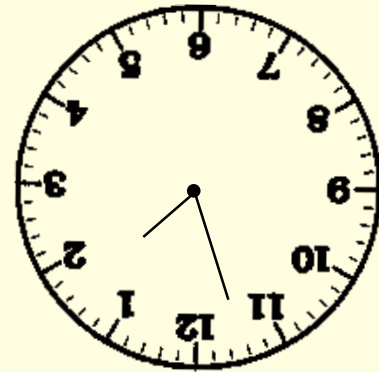


Is 12 o'clock
mid night
am or pm?

Unit 15: Time Topic 17 and 18

Answer
pm

37



Is 9 o'clock
at night am
or pm?

Unit 15: Time Topic 17 and 18

Answer
am

36



Is 10 o'clock
mid morning
am or pm?

Unit 15: Time Topic 17 and 18

Answer
pm

35

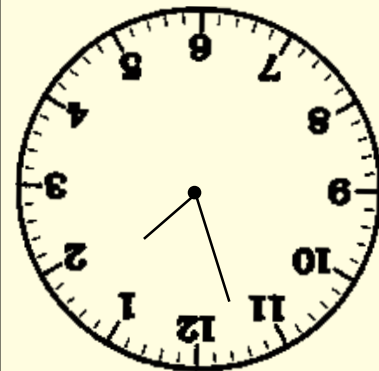


Is 1 o'clock
in the afternoon
am or pm?

Unit 15: Time Topic 17 and 18

Answer
pm

34



Is 6.30 in
the evening
am or pm?